


Name: _____ Class: _____ Date: _____

Worksheet 11

Dividing by 4 and 8

1 Write the missing numbers.

(a)



$$16 \div 4 = \square$$

$$16 \div 8 = \square$$

(b)



$$32 \div 4 = \square$$

$$32 \div 8 = \square$$

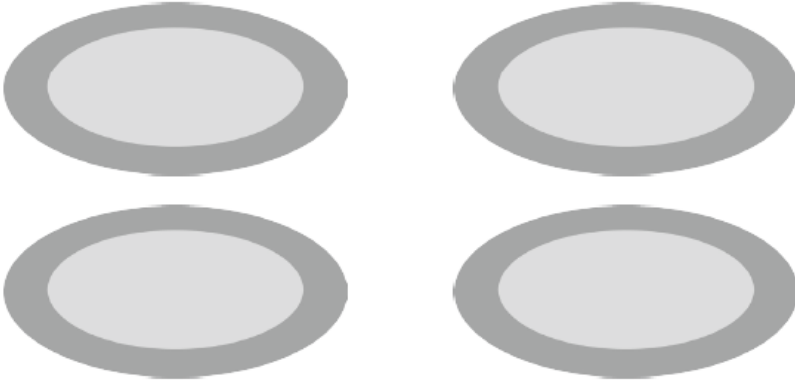
(c)



$$24 \div 4 = \square$$

$$24 \div 8 = \square$$


- 2 Divide 20 doughnuts into 4 equal groups.
Draw these doughnuts on each plate and fill in the blanks.



$$20 \div 4 = \square$$

$$\square \times 4 = 20$$

- 3 Draw 7 dots on each ladybird and fill in the blanks.



$$7 \times 8 = \square$$

$$\square \div 8 = 7$$

$$8 \times 7 = \square$$

$$\square \div 7 = 8$$