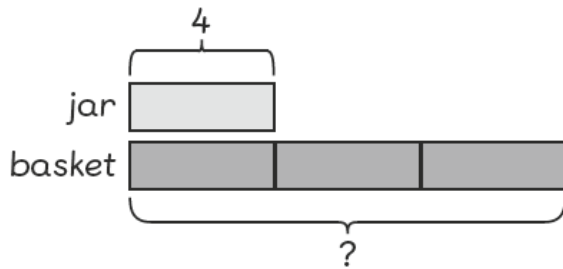


# Worksheet 14

## Solving Word Problems

Solve.

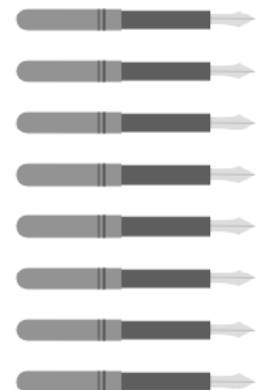
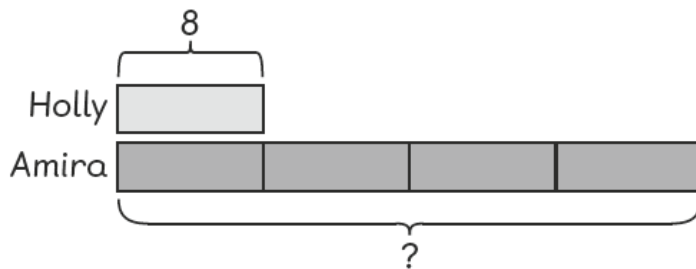
- 1** There are 4 cookies in a jar.  
There are 3 times as many cookies in a basket as in the jar.  
How many cookies are there in the basket?



$$\boxed{\phantom{00}} \times \boxed{\phantom{00}} = \boxed{\phantom{00}}$$

There are  cookies in the basket.

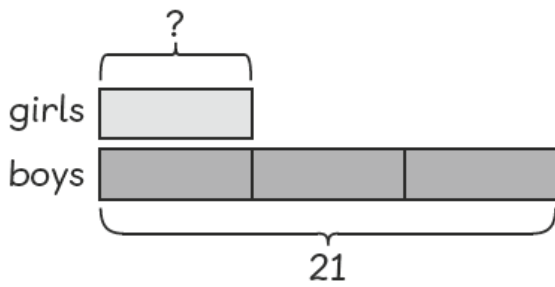
- 2** Holly has 8 pens. Amira has 4 times as many pens as Holly.  
How many pens does Amira have?



$$\boxed{\phantom{00}} \times \boxed{\phantom{00}} = \boxed{\phantom{00}}$$

Amira has  pens.

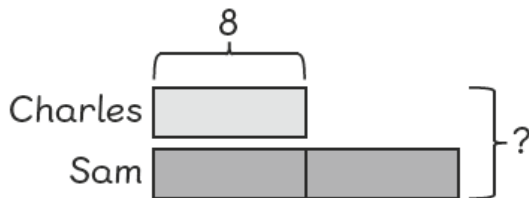

- 3** There are 21 boys in a class.  
There are 3 times as many boys as girls in the class.  
How many girls are there in the class?



$$\square \div \square = \square$$

There are  girls in the class.

- 4** Charles has 8 stamps.  
Sam has twice as many stamps as Charles.  
How many stamps do both the boys have altogether?



$$\square \times \square = \square$$

The boys have  stamps altogether.