

Further Multiplication and Division

Name: _____ Class: _____ Date: _____


Worksheet 1

Multiplying 2-Digit Numbers

1 Multiply.


(a) $2 \times 3 =$

$2 \times 30 =$



(b) $5 \times 4 =$

$5 \times 40 =$




(c) $6 \times 8 =$

$60 \times 8 =$



(d) $9 \times 3 =$

$90 \times 3 =$



2 Multiply and fill in the blanks.

(a) $4 \times 30 = \square$

$4 \times 50 = \square$

$4 \times 70 = \square$

$4 \times 80 = \square$

$4 \times 100 = \square$

(b) $8 \times 20 = \square$

$8 \times 40 = \square$

$8 \times 60 = \square$

$8 \times 80 = \square$

$8 \times 90 = \square$

(c) $30 \times 3 = \square$

$30 \times 5 = \square$

$30 \times 7 = \square$

$30 \times 8 = \square$

$30 \times 10 = \square$

(d) $40 \times 3 = \square$

$40 \times 4 = \square$

$40 \times 6 = \square$

$40 \times 7 = \square$

$40 \times 9 = \square$