

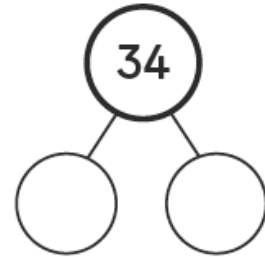
Worksheet 7

Dividing with Regrouping

Divide.

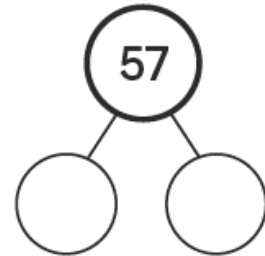
$$(a) \quad 34 \div 2 = \boxed{} + \boxed{}$$

$$= \boxed{}$$



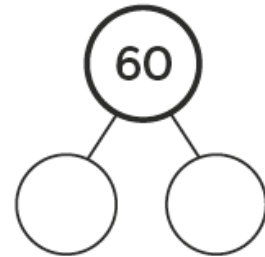
$$(b) \quad 57 \div 3 = \boxed{} + \boxed{}$$

$$= \boxed{}$$



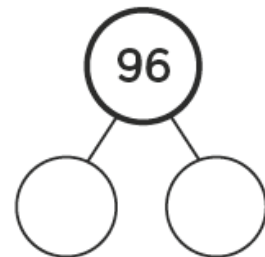
$$(c) \quad 60 \div 4 = \boxed{} + \boxed{}$$

$$= \boxed{}$$



$$(d) \quad 96 \div 8 = \boxed{} + \boxed{}$$

$$= \boxed{}$$



$$(e) \quad 75 \div 3 = \boxed{} + \boxed{}$$

$$= \boxed{}$$

